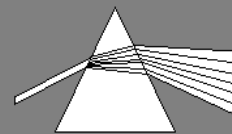


# Colour 6 - Coloured Objects



## Coloured Objects

A yellow bag looks yellow under normal white light, but under other conditions it may look red, green or even black. The colour an object appears depends upon the colour of the light illuminating it. This worksheet explores how colours appear under normal white light.

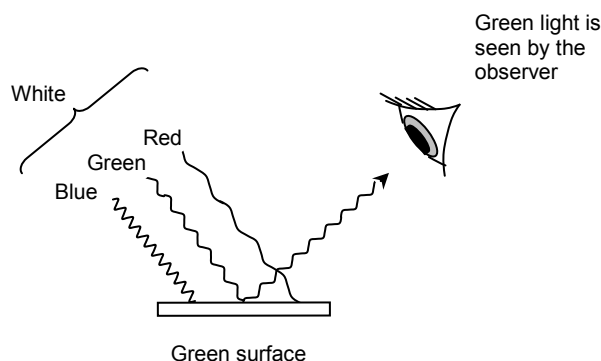
### Task 1

We can consider white light to be made up of the three primary colours, red, green and blue. If white light is shining on a yellow bag:

- Which two primary colours must be bouncing off the bag into our eyes?
- Which primary colour is being absorbed?

## Why Do Objects Appear The Colour They Do?

Diagram 1



### Task 2

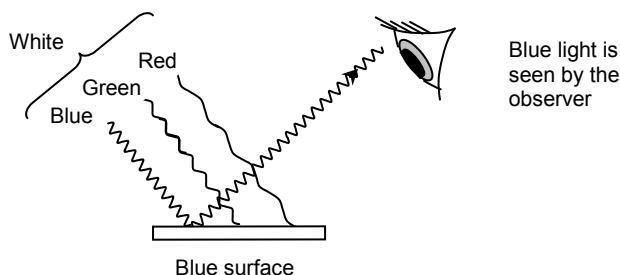
Complete the sentences below by filling in the gaps:

In diagram 1, red, green and \_\_\_\_\_ light (making up white light) are incident upon the object. The object has a green surface, so it reflects the \_\_\_\_\_ component, but absorbs the \_\_\_\_\_ and \_\_\_\_\_ components. The observer sees the object as the colour \_\_\_\_\_.

### Task 3

Use the diagram below to help explain why a blue surface appears blue in white light.

Diagram 2

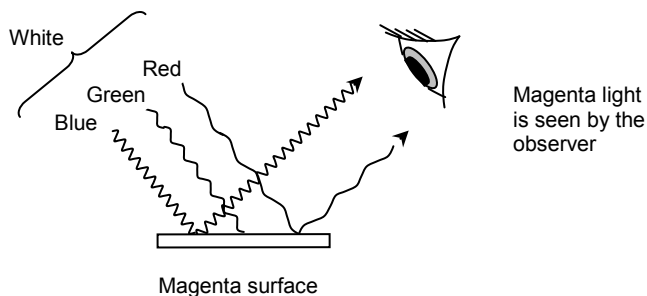


# Coloured Objects (continued)

## Task 4

Complete the sentences describing how a magenta object looks magenta under white light

Diagram 3

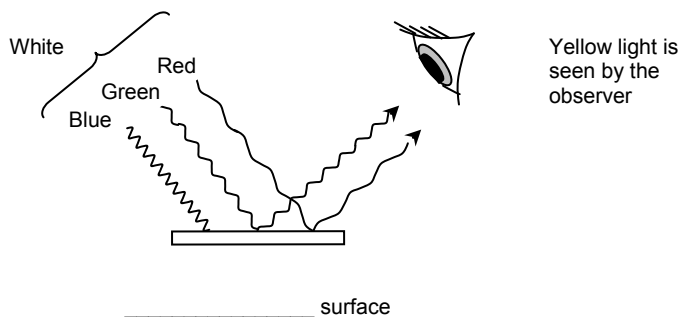


In diagram 3, white light (made up of \_\_\_\_\_, \_\_\_\_\_ and \_\_\_\_\_ components) is incident upon the object. The object has a \_\_\_\_\_ surface, so it reflects the \_\_\_\_\_ and \_\_\_\_\_ components, but absorbs the \_\_\_\_\_ component. The observer sees the colour \_\_\_\_\_.

## Task 5

Use the diagram below to explain why a yellow surface appears yellow in white light.

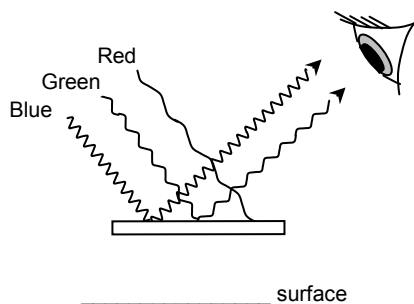
Diagram 4



## Task 6

Suggest what colour the surfaces below are.

a.



b.

